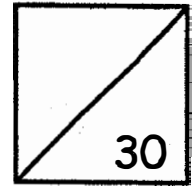


MATHEMATICS
2021 PRIMARY 1
TOPICAL QUIZ 4
MULTIPLICATION, DIVISION & TIME



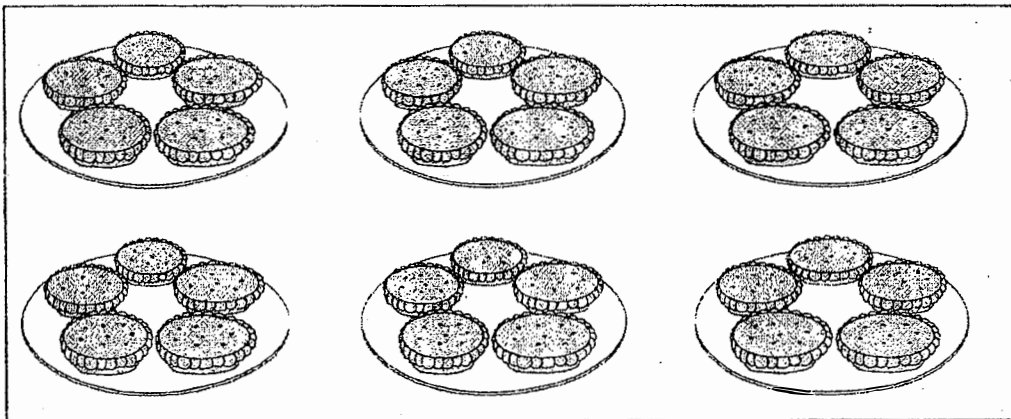
Name: _____ () Date: _____

Class: Primary 1 _____ Parent's Signature: _____

Section A: MCQ (6 × 1 mark = 6 marks)

Read the questions carefully. Choose the correct answer and write its number in the brackets provided.

1. David puts 30 tarts equally on 6 plates.



Which of the following shows the correct grouping for the picture above?

- (1) 5 sixes
- (2) 5 groups of 6
- (3) 6 groups of 5
- (4) $5 + 5 + 5 + 5 + 5$


()

2. $3 + 3 + 3 + 3 = \underline{\hspace{2cm}}$ threes

- (1) 11
- (2) 12
- (3) 3
- (4) 4

()

3. Eden packs 10 oranges equally into 5 bags. How many oranges are there in each bag?



- (1) 6
- (2) 2
- (3) 10
- (4) 15

()


4. What is the missing number in the box?

$2 + 2 + 2 = \boxed{\text{?}}$ groups of 2

- (1) 6
- (2) 2
- (3) 3
- (4) 4

()

5. What is the time shown on the clock?

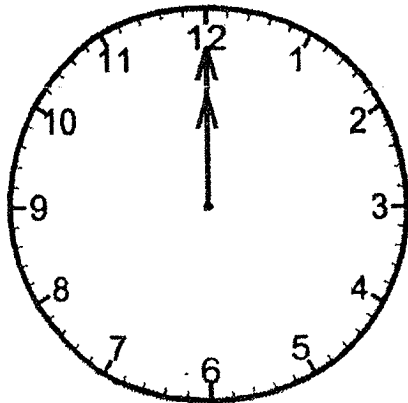


- (1) 1:03
- (2) 1:15
- (3) 3:01
- (4) 3:05

()

6. Devi played for half an hour. She stopped playing at 12 noon.

What time did she start playing?



- (1) 11:30 am
- (2) 11:30 pm
- (3) 12:30 am
- (4) 12:30 pm

()

Section B: Open-ended Questions (18 marks)


Fill in the correct answers in the spaces provided.

Questions 7 to 12 carry 1 mark each.

7. Sue has 18 stamps. She wants to put them into 3 equal groups.
Circle to show the number of stamps in each group.



Study the picture below carefully and answer Questions 8 to 11.



8. There are groups of crayons.


9. Each group has crayons.

10. 8 fours = groups of

11. There are crayons altogether.

12. John had his breakfast at 7:10 am.


Draw the minute hand on the clock face to show the time.

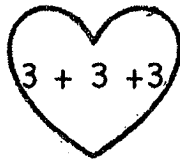


7:10 am


Questions 13 to 18 carry 2 marks each.

13. Colour the equations that have the same answer.

 $2 + 2$


 $3 + 3 + 3$

 3×3

 6×2

14. Jayden baked 15 cupcakes. He put 3 cupcakes into one box.
How many boxes would he need?

Circle to show the number of boxes he would need.



Jayden would need _____ boxes.

For questions 15 and 16, draw lines to match the equations.

15.

$2 + 2 + 2$

16.

4×6

• 2 groups of 2

• $6 + 6 + 6 + 6$

• 3 twos

17. Read the television schedule and fill in the blanks.

Time	Channel
7 am	News
7:30 am	Wildlife
8:15 am	The Flash
9:45 am	Yum Yum
10:30 am	Hop Over
11:30 am	Ollie and Friends
12 noon	Talk Show
1:00 pm	MTV

(a) The show _____ lasts 1 h.

(b) Siti switches on the television at 8 am.

She is watching _____.

18. Kim bought 2 boxes of apples. There are 10 apples in each box.
Lingli bought 4 bags of apples. There are 5 apples in each bag.


Each of the statements below is either true or false based on the information given above. For each statement, put a tick (✓) to indicate your answer.















Statement	True	False
a) Lingli bought more apples than Kim.		
b) Kim can pack all her apples equally into bags of 5.		

Section C: Problem Sums (3 x 2 marks = 6 marks)

Do these sums carefully. Show all your equations and workings clearly in the spaces provided.

19. Belle saves \$2 every day. How much money can she save in a week?




Mon	Tue	Wed	Thu	Fri	Sat	Sun
						
						

$$\square \times \bigcirc = \square$$

She can save \$ in a week.

20. Mr. Yeong arranged 5 rows of 5 chairs in the classroom. How many chairs are there altogether in the classroom?




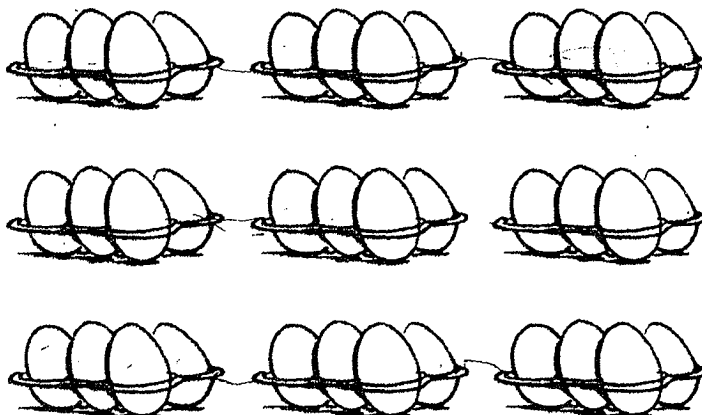
$$\square \circ \square = \square$$

There are chairs altogether in the classroom.

21. A farmer sells eggs in trays of 4.

He sold a total of 9 trays of eggs on Sunday.

How many eggs did he sell altogether on Sunday?



He sold eggs altogether.

- End of paper -

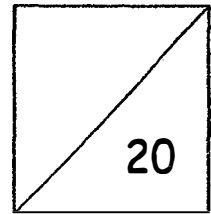
1. The first part of the text discusses the importance of maintaining accurate records of all transactions and activities. It emphasizes that this is essential for ensuring transparency and accountability in the organization's operations.

2. The second part of the text focuses on the role of the management team in setting clear goals and objectives. It highlights that effective communication and collaboration are key to achieving these goals.

3. The third part of the text addresses the need for regular monitoring and evaluation of progress. It suggests that this should be done through a combination of formal reports and informal discussions.

4. The final part of the text concludes by stating that a strong foundation of trust and communication is necessary for the organization to succeed in the long term.

**MATHEMATICS
PRIMARY 1
TOPICAL QUIZ 1**



Numbers to 10, Addition and Subtraction Within 10


Name: _____ () Date: _____

Class: Primary 1 _____ Parent's Signature: _____

Read the questions carefully. Write your answers in the boxes given.

Questions 1 to 12 carry 1 mark each.



1. Count and write the number of butterflies in the box.



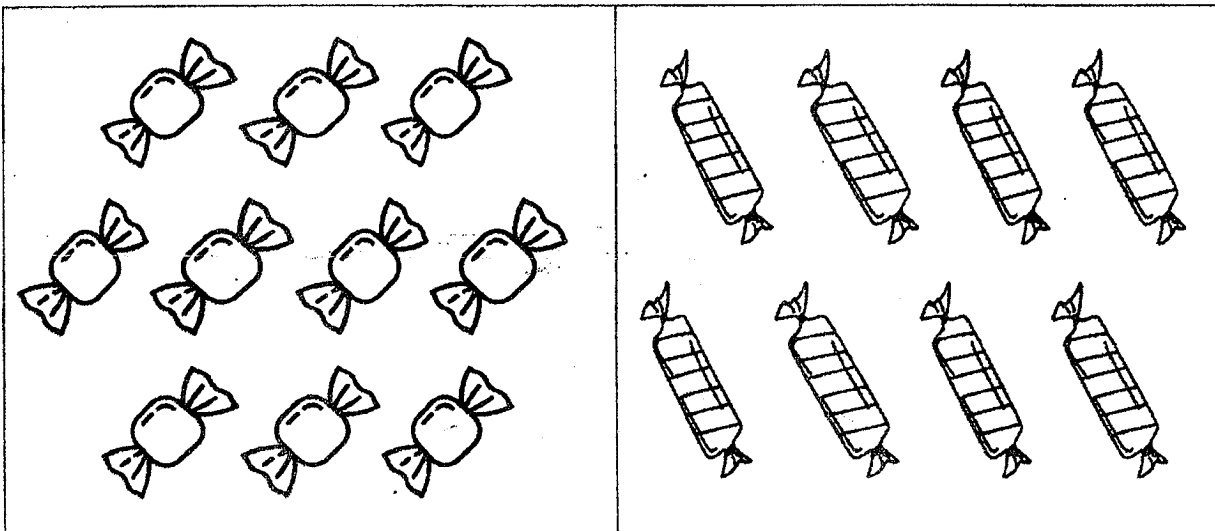
2. Write the number in words.

2	
---	--

3. Tick (✓) the set that has more cars.


Set A		
Set B		

4. Count and compare. Write the numbers in the boxes.

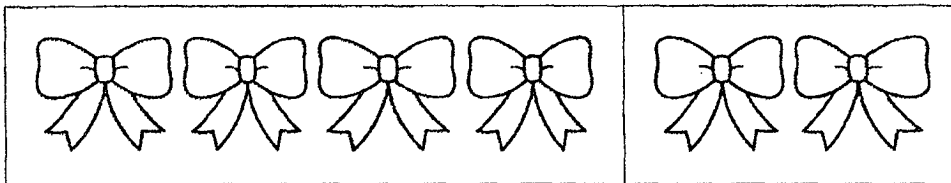


<input type="text"/>	is less than	<input type="text"/>
----------------------	--------------	----------------------

5. What is the missing number? Write your answer in the box.



6. Write an addition equation for the picture shown below.




$$\square + \square = \square$$

7. $5 + 5 = \square$

8. $7 + \square = 8$

9. Greg has 7 . He eats 4 .







Greg has \square  left.

10. Complete the subtraction equation.




$$6 - 6 = \square$$

11. Circle the heart that has the same answer as $7 + 1$.



12. There are 7 big and small starfish.

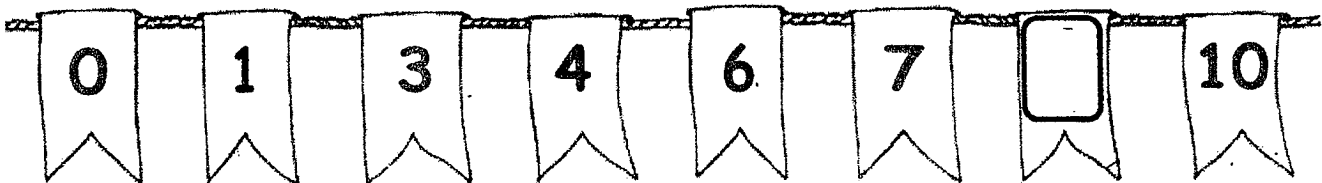
5 of them are small.



There are big starfish.

Questions 13 to 16 carry 2 marks each.

13. Complete the number pattern.



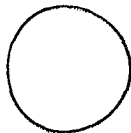




Read and solve the problem sums. (3 × 2 marks = 6 marks)

Show your equations clearly in the spaces provided.

14 . Bob has 2 books.

Tim has 3 books.

How many books do they have altogether?



=





They have books altogether.

15. Jia Jun has 6 flowers.

Molly gives him 3 more flowers.

How many flowers does Jia Jun have in all?



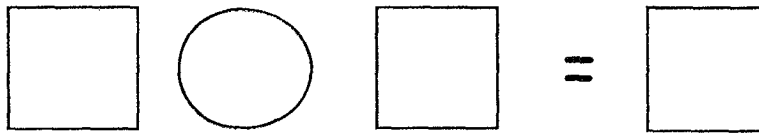

$$\square \quad \bigcirc \quad \square \quad = \quad \square$$

Jia Jun has flowers in all.

16. There are 10 apples.

Ned eats 3 apples.

How many apples are left?



There are apples left.

--- End of Paper ---

Set by: Ms Yvonne Fan

ANSWER KEY


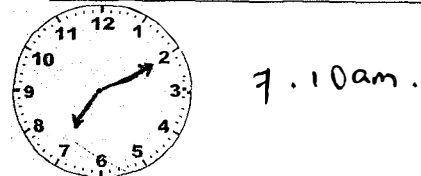

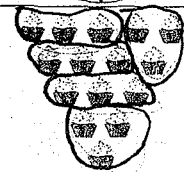
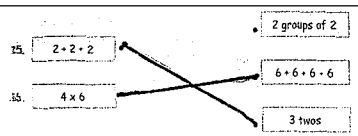
YEAR : 2021
LEVEL : Primary 1
SUBJECT : MATHEMATICS
TERM : Topical Quiz 1 , Topical Quiz 4

Topical Quiz 1

Q1	7	Q2	two
Q3	Tick, Set B	Q4	8 is less than <u>10</u> .
Q5	$2+2=4$	Q6	$4+2=6$
Q7	$5+5=10$	Q8	$7+1=8$
Q9	$7-4=3$	Q10	$6-6=0$
Q11	Circle , 3+5	Q12	2
Q13	$7+2=9$	Q14	$2+3=5$
Q15	$6+3=9$	Q16	$10-3=7$

Topical Quiz 4

Q1	3	Q2	4	Q3	2	Q4	3	Q5	4
Q6	4								

Q7		Q8	8
Q9	4	Q10	8 groups of 4
Q11	32	Q12	
Q13		Q14	 5
Q15 and Q16		Q17	(a) Hop Over and Talk Show (b) Wildlife
Q18	(a) False (b) True	Q19	$7 \times 2 = 14$
Q20	$5 \times 5 = 25$	Q21	$9 \times 4 = 36$

